

Warm-up

If  $\mathbf{a} = \begin{pmatrix} -1 \\ 1 \\ 3 \end{pmatrix}$ ,  $\mathbf{b} = \begin{pmatrix} 1 \\ -3 \\ 2 \end{pmatrix}$  and  $\mathbf{c} = \begin{pmatrix} -2 \\ 2 \\ 4 \end{pmatrix}$  find:

**a**  $|\mathbf{a}|$ 

$\sqrt{11}$

**b**  $|\mathbf{b}|$ 

$\sqrt{14}$

**c**  $|\mathbf{b} + \mathbf{c}|$ 

$\sqrt{38}$

**d**  $|\mathbf{a} - \mathbf{c}|$ 

$\sqrt{3}$

**e**  $|\mathbf{a}| |\mathbf{b}|$ 

$$\begin{pmatrix} \sqrt{14} \\ -3\sqrt{11} \\ 2\sqrt{11} \end{pmatrix}$$

**f**  $\frac{1}{|\mathbf{a}|} \mathbf{a}$ 

$$\begin{pmatrix} \frac{1}{\sqrt{11}} \\ \frac{1}{\sqrt{11}} \\ \frac{3}{\sqrt{11}} \end{pmatrix}$$

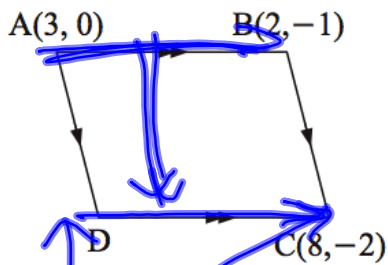
# Geometrical Proofs with Vectors

## Geometrical proofs

When you are not given specific vectors you can still use vector addition, subtraction and scalar multiples to deduce some geometrical results.

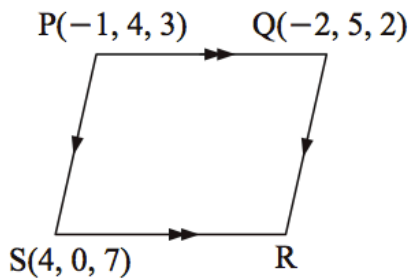
Use vector methods to find the remaining vertex of:

**a**



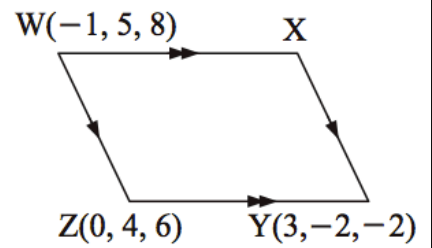
$$D(9, -1)$$

**b**



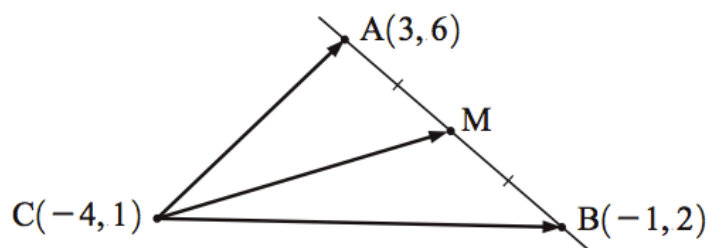
$$R(3, 1, 6)$$

**c**



$$X(2, -1, 0)$$

o



- Find the coordinates of M.
- Find vectors  $\vec{CA}$ ,  $\vec{CM}$  and  $\vec{CB}$ .
- Verify that  $\vec{CM} = \frac{1}{2}\vec{CA} + \frac{1}{2}\vec{CB}$ .

$$a) (1, 4)$$

$$b) \vec{CA} = \begin{pmatrix} 7 \\ 5 \end{pmatrix}$$

$$\vec{CM} = \begin{pmatrix} 5 \\ 3 \end{pmatrix}$$

$$\vec{CB} = \begin{pmatrix} 3 \\ 1 \end{pmatrix}$$

$$\vec{CM} = \frac{1}{2}\vec{CA} + \frac{1}{2}\vec{CB}$$

$$\begin{pmatrix} 5 \\ 3 \end{pmatrix} = \frac{1}{2} \begin{pmatrix} 7 \\ 5 \end{pmatrix} + \frac{1}{2} \begin{pmatrix} 3 \\ 1 \end{pmatrix}$$

$$\begin{pmatrix} 5 \\ 3 \end{pmatrix} = \begin{pmatrix} \frac{7}{2} \\ \frac{5}{2} \end{pmatrix} + \begin{pmatrix} \frac{3}{2} \\ \frac{1}{2} \end{pmatrix}$$

$$= \begin{pmatrix} \frac{7+3}{2} \\ \frac{5+1}{2} \end{pmatrix}$$

$$= \begin{pmatrix} 5 \\ 3 \end{pmatrix}$$

[BC] is parallel to [OA] and is twice its length.  
Find, in terms of  $\mathbf{p}$  and  $\mathbf{q}$ , vector expressions for:  
**a**  $\overrightarrow{AC}$     **b**  $\overrightarrow{OM}$ .

a)  ~~$\overrightarrow{AC} = -p - q$~~

b)  $\overrightarrow{OM} = \frac{1}{2}p + \frac{1}{2}q$

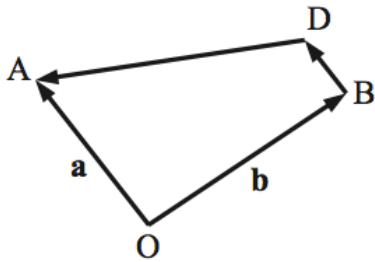
$\overrightarrow{OA} = p$      $\overrightarrow{AC} = -2p + (-q) + p$

$\overrightarrow{OB} = q$      $\overrightarrow{AC} = \overrightarrow{AO} + \overrightarrow{OB} + \overrightarrow{BC}$

$\overrightarrow{BC} = 2p$      $\overrightarrow{AC} = -p + q + 2p$

$\overrightarrow{AC} = p + q$

$\overrightarrow{OM} = \overrightarrow{OA} + \frac{1}{2}\overrightarrow{AC}$



In the given figure [BD] is parallel to [OA] and half its length. Find, in terms of **a** and **b**, vector expressions for:

**a**  $\overrightarrow{BD}$

**b**  $\overrightarrow{AB}$

**c**  $\overrightarrow{BA}$

**d**  $\overrightarrow{OD}$

**e**  $\overrightarrow{AD}$

**f**  $\overrightarrow{DA}$

In this question you may **not** assume any diagonal properties of parallelograms.

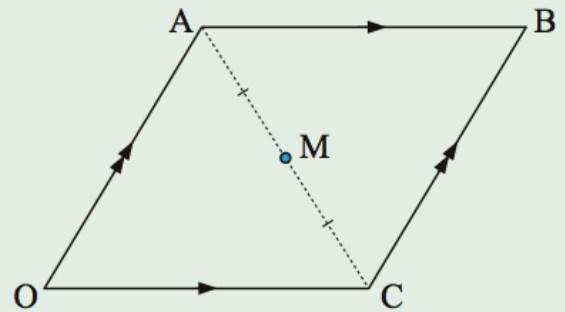
OABC is a parallelogram with  $\vec{OA} = \mathbf{p}$  and  $\vec{OC} = \mathbf{q}$ . M is the midpoint of [AC].

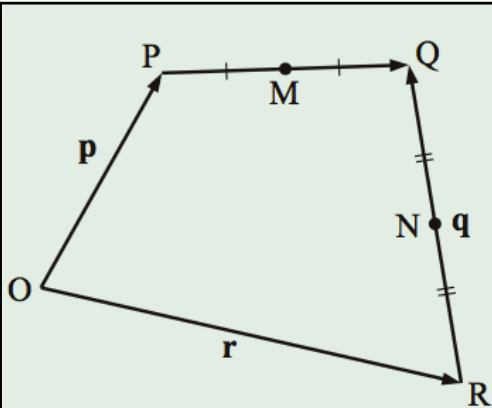
**a** Find in terms of  $\mathbf{p}$  and  $\mathbf{q}$ :

**i**  $\vec{OB}$

**ii**  $\vec{OM}$

**b** Using **a** only, show that O, M and B are collinear, and that M is the midpoint of [OB].





In the figure alongside,  $\vec{OP} = \mathbf{p}$ ,  $\vec{OR} = \mathbf{r}$  and  $\vec{RQ} = \mathbf{q}$ .

If M and N are midpoints of the sides as shown, find in terms of  $\mathbf{p}$ ,  $\mathbf{q}$  and  $\mathbf{r}$ :

- a**  $\vec{OQ}$       **b**  $\vec{PQ}$       **c**  $\vec{ON}$       **d**  $\vec{MN}$



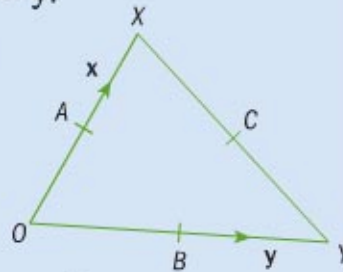
In triangle  $OXY$ ,  $A$ ,  $B$  and  $C$  are the midpoints of  $OX$ ,  $OY$  and  $XY$  respectively,  $\vec{OX} = \mathbf{x}$  and  $\vec{OY} = \mathbf{y}$ .

**a** Find expressions for  $\vec{OA}$ ,  $\vec{OB}$ ,  $\vec{XY}$ ,  $\vec{OC}$  and  $\vec{CO}$  in terms of  $\mathbf{x}$  and  $\mathbf{y}$ .

**b** Find an expression for  $\vec{AB}$  in terms of  $\mathbf{x}$  and  $\mathbf{y}$ . What is the relationship between the line  $XY$  and the line  $AB$ ?

**c**  $P$  is the point such that  $\vec{OP} = \vec{OX} + \frac{2}{3}\vec{XP}$ . Find  $\vec{OP}$ .

**d** What can you conclude about the position of  $P$ ?



## Homework

### Chapter 12.2

12H: 1-5

### Review for Quiz

- Resultant Vectors
- Using vectors to show/use *Geometric* properties
  - Vector addition/subtraction
  - Magnitude of a vector
    - Unit vectors
    - Parallel vectors